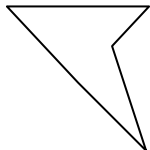




Determine which letter BEST represents the shapes that were used to create the figure shown.

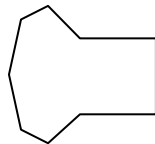
Answers

1)



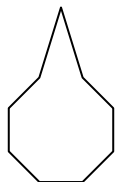
- A. triangle & triangle
- B. octagon & rectangle
- C. pentagon & heptagon
- D. hexagon & triangle

2)



- A. rectangle & heptagon
- B. square & quadrilateral
- C. triangle & quadrilateral
- D. heptagon & hexagon

3)



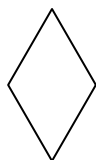
- A. octagon & pentagon
- B. rectangle & heptagon
- C. triangle & octagon
- D. heptagon & hexagon

4)



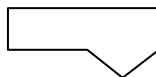
- A. hexagon & rectangle
- B. quadrilateral & hexagon
- C. heptagon & rectangle
- D. quadrilateral & square

5)



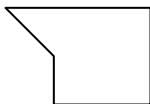
- A. pentagon & rectangle
- B. hexagon & square
- C. octagon & quadrilateral
- D. triangle & triangle

6)



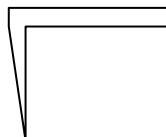
- A. square & rectangle
- B. rectangle & heptagon
- C. pentagon & rectangle
- D. quadrilateral & triangle

7)



- A. pentagon & octagon
- B. hexagon & heptagon
- C. heptagon & octagon
- D. square & triangle

8)



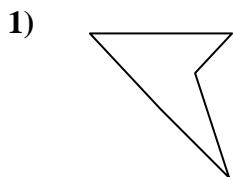
- A. rectangle & triangle
- B. octagon & hexagon
- C. pentagon & rectangle
- D. hexagon & triangle

- 1. _____
- 2. _____
- 3. _____
- 4. _____
- 5. _____
- 6. _____
- 7. _____
- 8. _____

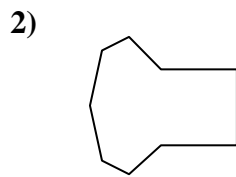


Determine which letter BEST represents the shapes that were used to create the figure shown.

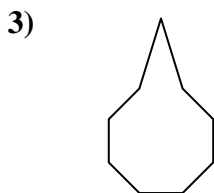
Answers



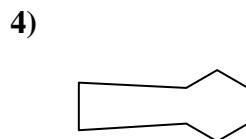
- A. triangle & triangle
- B. octagon & rectangle
- C. pentagon & heptagon
- D. hexagon & triangle



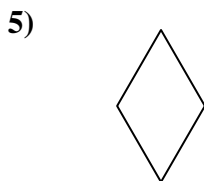
- A. rectangle & heptagon
- B. square & quadrilateral
- C. triangle & quadrilateral
- D. heptagon & hexagon



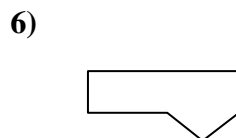
- A. octagon & pentagon
- B. rectangle & heptagon
- C. triangle & octagon
- D. heptagon & hexagon



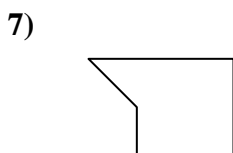
- A. hexagon & rectangle
- B. quadrilateral & hexagon
- C. heptagon & rectangle
- D. quadrilateral & square



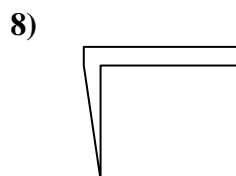
- A. pentagon & rectangle
- B. hexagon & square
- C. octagon & quadrilateral
- D. triangle & triangle



- A. square & rectangle
- B. rectangle & heptagon
- C. pentagon & rectangle
- D. quadrilateral & triangle



- A. pentagon & octagon
- B. hexagon & heptagon
- C. heptagon & octagon
- D. square & triangle



- A. rectangle & triangle
- B. octagon & hexagon
- C. pentagon & rectangle
- D. hexagon & triangle

- 1. **A**
- 2. **A**
- 3. **C**
- 4. **B**
- 5. **D**
- 6. **D**
- 7. **D**
- 8. **A**